

Name \_\_\_\_\_

Worksheet 1

Solve the equations below. Add and subtract 10 and 1.

$24 + 10 = \underline{\hspace{2cm}}$

$82 - 1 = \underline{\hspace{2cm}}$

$13 + 10 = \underline{\hspace{2cm}}$

$41 + 10 = \underline{\hspace{2cm}}$

$32 + 1 = \underline{\hspace{2cm}}$

$70 - 1 = \underline{\hspace{2cm}}$

$57 - 10 = \underline{\hspace{2cm}}$

$65 + 10 = \underline{\hspace{2cm}}$

$15 + 1 = \underline{\hspace{2cm}}$

$44 - 1 = \underline{\hspace{2cm}}$

$45 - 10 = \underline{\hspace{2cm}}$

$38 + 10 = \underline{\hspace{2cm}}$

$27 + 1 = \underline{\hspace{2cm}}$

$61 - 1 = \underline{\hspace{2cm}}$

$89 + 10 = \underline{\hspace{2cm}}$

$66 - 10 = \underline{\hspace{2cm}}$

Name \_\_\_\_\_ Worksheet 2

Put the correct sign in the middle of the equation?

Is it addition or subtraction?

$24 \quad 1 = 25$

$47 \quad 10 = 37$

$51 \quad 10 = 61$

$23 \quad 1 = 22$

$73 \quad 1 = 74$

$84 \quad 10 = 74$

$69 \quad 1 = 70$

$41 \quad 10 = 51$

$60 \quad 10 = 70$

$56 \quad 1 = 57$

$48 \quad 10 = 58$

$19 \quad 10 = 9$

$93 \quad 1 = 92$

$33 \quad 10 = 43$

Name \_\_\_\_\_ Worksheet 3

Fill in the missing sign and number. Is it addition and subtraction? Is it 1 or 10?

$83 \_ \_ = 93$

$23 \_ \_ = 24$

$45 \_ \_ = 35$

$57 \_ \_ = 67$

$32 \_ \_ = 22$

$89 \_ \_ = 88$

$69 \_ \_ = 79$

$17 \_ \_ = 27$

$44 \_ \_ = 45$

$59 \_ \_ = 60$

$74 \_ \_ = 64$

$12 \_ \_ = 22$

$30 \_ \_ = 29$

$39 \_ \_ = 29$

Name \_\_\_\_\_ Worksheet 4

Solve the number strings below.

$$8 + 3 + 8 + 7 + 2 =$$

$$4 + 2 + 4 + 1 + 10 =$$

$$7 + 2 + 4 + 10 + 8 =$$

$$3 + 3 + 5 + 2 + 5 + 1 =$$

$$10 + 3 + 10 + 4 + 1 =$$

$$9 + 8 + 3 + 4 + 1 + 1 =$$

Name \_\_\_\_\_ Worksheet 5

Solve the number strings.

$$7 + 6 + 5 + 3 + 2 =$$

$$8 + 1 + 2 + 5 + 6 + 2 =$$

$$5 + 6 + 2 + 4 + 7 =$$

$$9 + 2 + 4 + 2 + 1 + 10 =$$

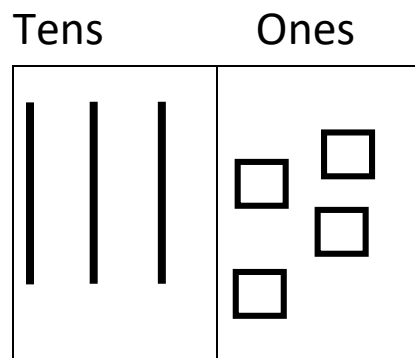
$$7 + 4 + 3 + 6 + 1 + 10 =$$

$$9 + 0 + 4 + 8 + 5 + 2 =$$


Name \_\_\_\_\_ Worksheet 6

Place Value: Draw how many tens and ones are in each number.


34



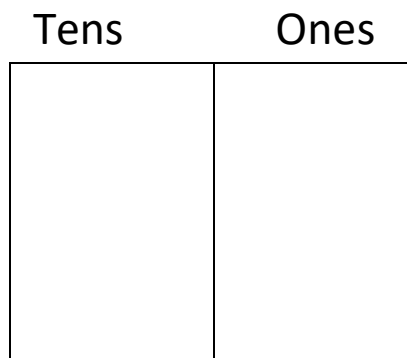
27



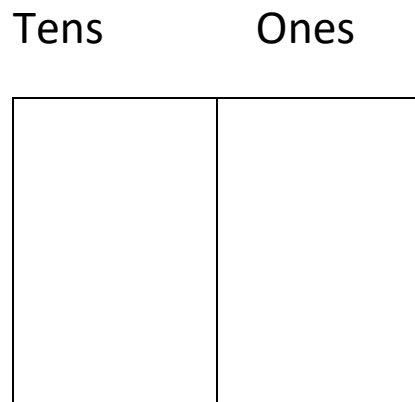
53



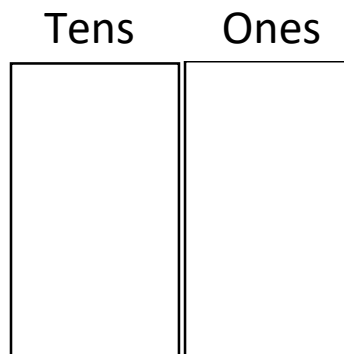
48



86



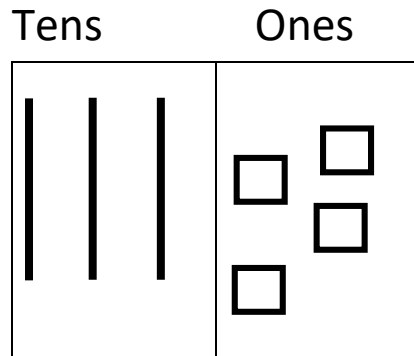
72



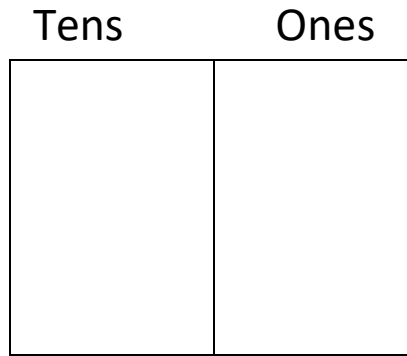
Name \_\_\_\_\_ Worksheet 7

Place Value: Draw how many tens and ones are in each number.


34



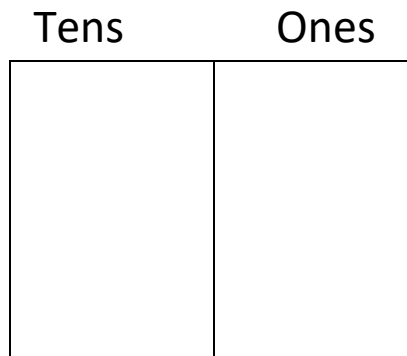
39



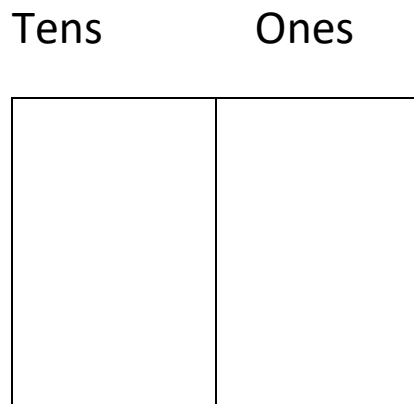
80



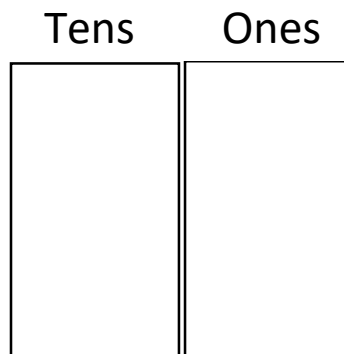
79



45

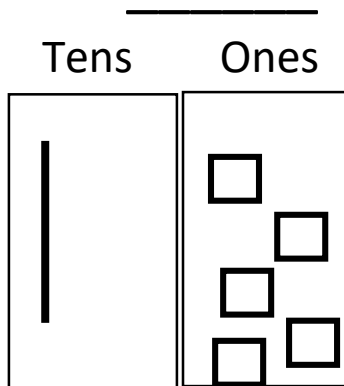
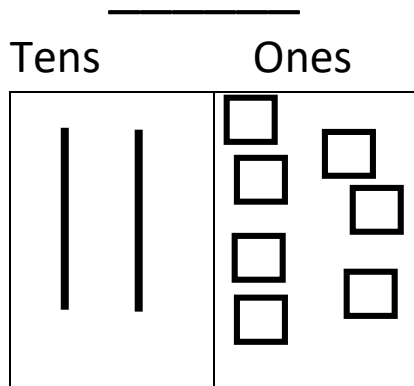
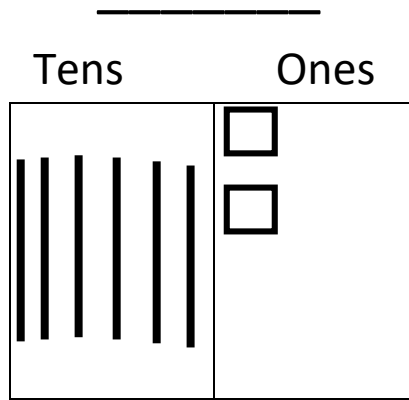
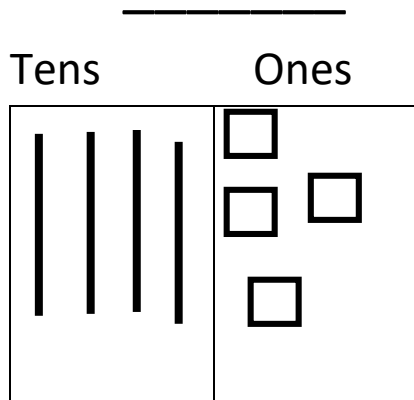
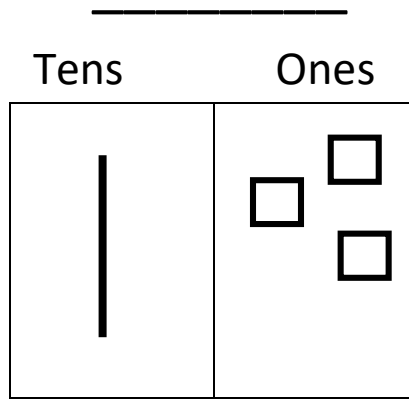
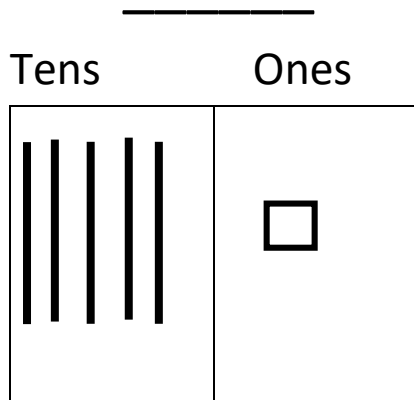


16



Name \_\_\_\_\_ Worksheet 8

Place Value: What value is the chart showing?





Name \_\_\_\_\_ Worksheet 9

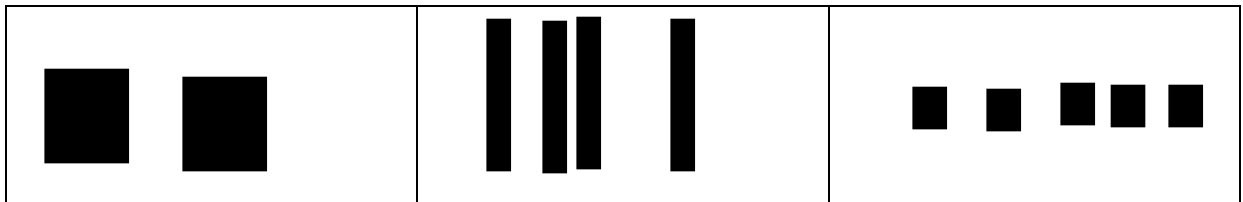
Place value: Draw how many hundreds, tens and ones for each number and write it out in expanded form.

245 \_\_\_\_\_


Hundreds

Tens

Ones



507 \_\_\_\_\_



317 \_\_\_\_\_

